

Why Was Hadrian's Wall Built?

10 You might have heard of Hadrian's Wall – a large, ancient
19 structure that runs close to the border between England
26 and Scotland – but why was it built?

34 To understand the reasons behind the construction of
44 Hadrian's Wall, we have to go back nearly 2,000 years
53 ago when Emperor Hadrian ruled the Roman Empire. At
64 the time, Scotland was known as Caledonia and was not a
73 part of the Roman Empire. Concerned about attacks from
83 what he named as 'the barbarians in the north', Hadrian
93 ordered that a defensive wall be built to protect England
95 from Caledonia.

105 When the wall was finished, it contained a number of
114 turrets and forts that allowed thousands of Roman soldiers
121 to be stationed across the entire length.



Quick Questions



1. What was Scotland known as at the time Hadrian's Wall was being built?



2. Find and copy one word which means the same as **worried**.



3. This text is called **Why Was Hadrian's Wall Built?** Invent a new title which sums up the text.



4. Would you have liked to help build Hadrian's Wall? Explain your answer.

Stage: 6	Challenge Words Name:
List: 9	



Spellings	1 st Attempt	2 nd Attempt	3 rd Attempt	4 th Attempt	5 th Attempt
appreciate					
communicate					
definite					
exaggerate					
harass					
marvellous					
persuade					
relevant					
stomach					
vehicle					

Spellings

appreciate

communicate

definite

exaggerate

harass

marvellous

persuade

relevant

stomach

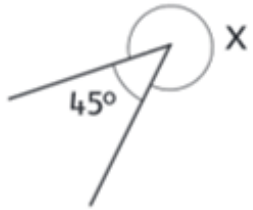
vehicle

a	s	d	f	g	h	h	j	k	d	e	f	i	n	i	t	e	l	q
e	z	x	c	v	b	n	m	q	w	e	s	t	y	a	r	e	e	w
x	r	t	y	u	i	o	p	a	s	d	u	f	g	h	j	l	l	h
a	r	e	l	e	v	a	n	t	z	x	o	c	v	b	c	n	m	c
g	q	w	y	t	r	e	u	i	o	p	l	a	s	i	d	f	g	a
g	m	n	b	v	c	x	z	g	f	d	l	s	h	a	q	w	e	m
e	o	a	p	p	r	e	c	i	a	t	e	e	t	y	u	i	r	o
r	p	a	s	q	w	e	r	t	y	u	v	i	o	p	l	k	j	t
a	h	g	f	d	c	v	b	n	h	a	r	a	s	s	u	y	t	s
t	p	e	r	s	u	a	d	e	m	h	a	q	r	t	y	s	d	a
e	f	g	e	t	a	c	i	n	u	m	m	o	c	h	j	k	l	a

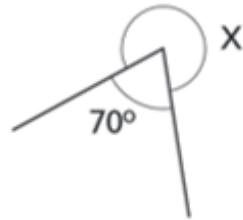
Can you find your spellings hidden in this word search?

■ Calculate the missing angle X. Do not measure!

1)



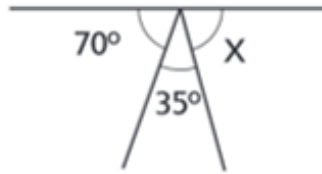
2)



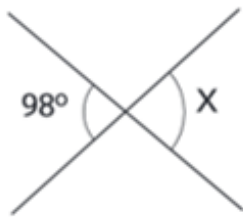
3)



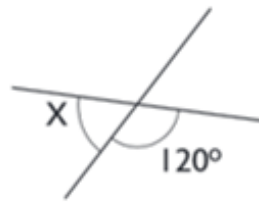
4)



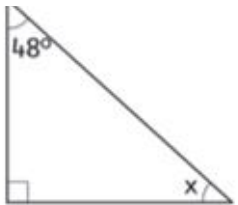
5)



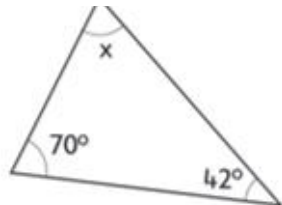
6)



7)



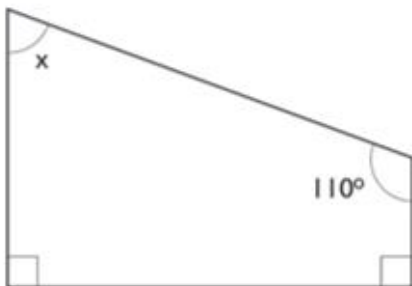
8)



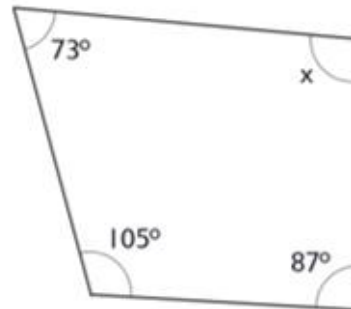
9)



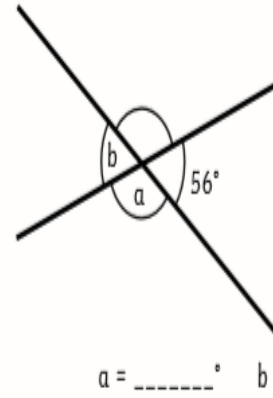
10)



11)

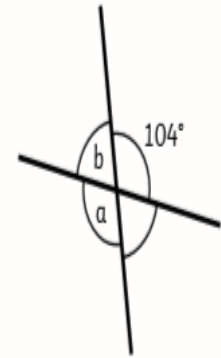


1.



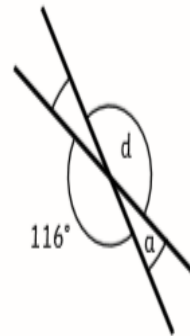
$a = \dots\dots\dots^\circ$ $b = \dots\dots\dots^\circ$

2.



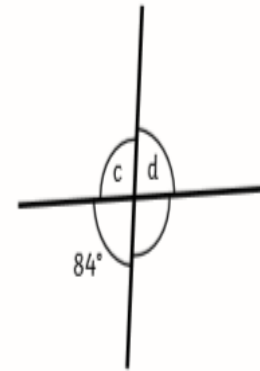
$b = \dots\dots\dots^\circ$ $c = \dots\dots\dots^\circ$

3.



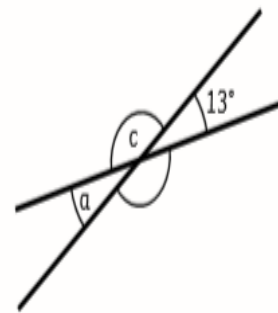
$a = \dots\dots\dots^\circ$ $d = \dots\dots\dots^\circ$

4.



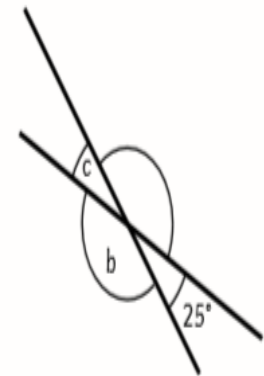
$c = \dots\dots\dots^\circ$ $d = \dots\dots\dots^\circ$

5.



$a = \dots\dots\dots^\circ$ $b = \dots\dots\dots^\circ$

6.



$b = \dots\dots\dots^\circ$ $c = \dots\dots\dots^\circ$

Animal Classification Flow Chart

Look at the animals in each box and write your own questions

